

Week 3 Rounding to the Nearest Hundred

Tue

Skills 10

Practice

Independent Practice Students will make a number line to round each number.

1	400
2	200
3	500
4	300
5	900
6	400

Wed

Skills 11

Transition

Direct Teaching

Using these steps, work with the students.

Read the problem. What is 273 rounded to the nearest hundred?

Underline the question. What is 273 rounded to the nearest hundred?

Circle the number. What is 273 rounded to the nearest hundred?

Underline the place value. What is 273 rounded to the nearest hundred?

Write the number in the place value chart.

H	T	O
2	7	3

Underline the place value you are rounding to.

H	T	O
<u>2</u>	7	3

Circle (put your eye on) the digit to the right of the underlined digit.

H	T	O
<u>2</u>	(7)	3

Round 273 using the number line.

273 rounds to 300.

Look at the place value chart.

Why would 273 be rounded to 300?

How do the number line and the circled number in the place value chart do the same action?

Using B - F, repeat the process.

B	700
C	400
D	800
E	900
F	300

Thu

Skills 12

Practice

Independent Practice

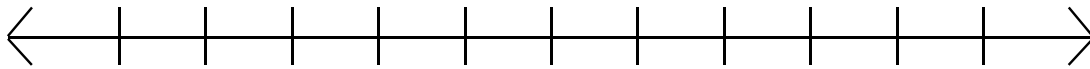
1	D	4	C
2	A	5	A
3	B	6	D

Name _____

A What is 273 rounded to the nearest hundred?

H	T	O

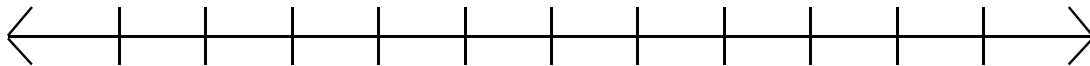
273 rounds to _____



B What is 705 rounded to the nearest hundred?

H	T	O

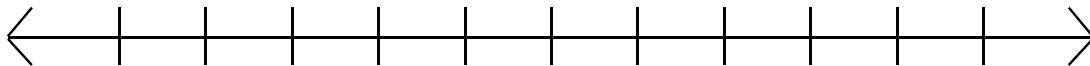
705 rounds to _____



C What is 351 rounded to the nearest hundred?

H	T	O

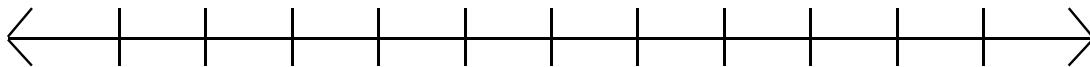
351 rounds to _____



D What is 818 rounded to the nearest hundred?

H	T	O

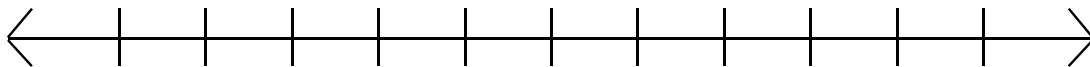
818 rounds to _____



E What is 924 rounded to the nearest hundred?

H	T	O

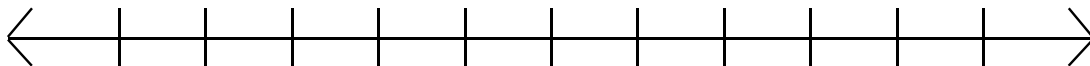
924 rounds to _____



F What is 263 rounded to the nearest hundred?

H	T	O

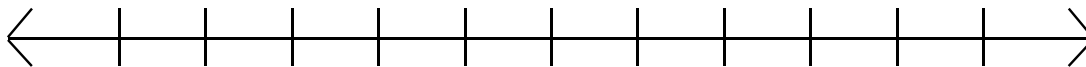
263 rounds to _____



A ¿Cuánto es 273 redondeado a la centena más cercana?

C	D	U

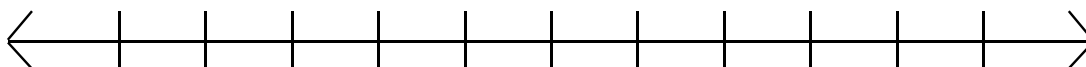
273 redondea a _____



B ¿Cuánto es 705 redondeado a la centena más cercana?

C	D	U

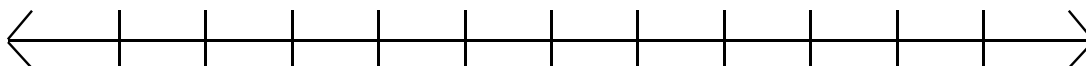
705 redondea a _____



C ¿Cuánto es 351 redondeado a la centena más cercana?

C	D	U

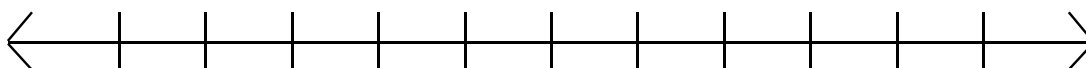
351 redondea a _____



D ¿Cuánto es 818 redondeado a la centena más cercana?

C	D	U

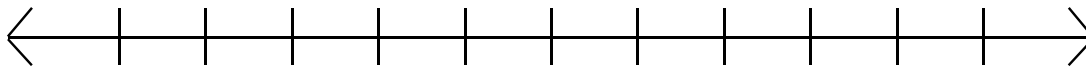
818 redondea a _____



E ¿Cuánto es 924 redondeado a la centena más cercana?

C	D	U

924 redondea a _____



F ¿Cuánto es 263 redondeado a la centena más cercana?

C	D	U

263 redondea a _____

